

SUMMATIVE ASSESSMENT -1 (2019-20)

CLASS- IV

SUBJECT: COMPUTER

MM: 50

TIME: 3 Hours

Q: 1 Tick the correct option.

1 × 10

- i. A computer has ____ kind of storage device.
(a) two (b) three (c) four
- ii. ____ is a temporary memory.
(a) ROM (b) RAM (c) CPU
- iii. The shortcut key to copy are ____
(a) ctrl + x (b) ctrl + c (c) ctrl + d
- iv. ____ moves a file from one location to another.
(a) cut (b) copy (c) paste
- v. ____ is the colour of the eraser.
(a) color 2 (b) color 1 (c) color 3
- vi. The ____ has commands that help us to draw.
(a) Paint button (b) Ribbon (c) Drawing
- vii. ____ means to change the size of the image.
(a) Rotate (b) Resize (c) Crop
- viii. The full screen option is in the ____ tab.
(a) Home (b) View (c) Insert
- ix. MS- Word is the most popular ____ software.
(a) operating system (b) word processing (c) drawing
- x. To select one character to the right, press ____
(a) shift + → (b) ctrl + → (c) shift + ←

Q: 2 Match the following:-

1 × 10

- | | |
|----------------|-----------------------------|
| i. 1024 GB | a) binary digits |
| ii. Hard disk | b) 1 MB |
| iii. 1024 kb | c) Maximum storage capacity |
| iv. 0 and 1 | d) 1 TB |
| v. Ctrl + c | e) undo |
| vi. Ctrl + z | f) cut |
| vii. Ctrl + y | g) select whole document |
| viii. Ctrl + v | h) copy |
| ix. Ctrl + x | i) Paste |
| x. Ctrl + a | j) Redo |

Q: 3 Write T for the true and F for false.

1 × 10

- i. A dotted circle appears around the selected part.
- ii. The pasted image is placed at the top left corner of the paint window.
- iii. Cut and Paste command are used to copy an image.
- iv. Multitasking mean we can do more than one job at a time.
- v. Window is a CUI based operating system.
- vi. We can't rename a folder once created.
- vii. Eight bits make one byte.
- viii. Computer memory measured in byte.
- ix. Primary storage device are also called external storage device.
- x. DVD stands for Drawing Video Disk.

Q: 4 Answer the following:-

2 × 10

- i. What is hard disk?
- ii. What is pen drive?
- iii. What is difference between copy and move?
- iv. What is a file?
- v. What is the use of polygon tool?
- vi. What do mean by crop?
- vii. Name the two type of selection?
- viii. What is the use of undo button?
- ix. What is meant by editing?

SUMMATIVE ASSESSMENT -1 (2019-20)

CLASS- IV

SUBJECT: G.K.

MM: 80

TIME: 3 Hours

Q: 1 Answer the following questions:

2 × 10

- a) Who is the President of India?
- b) Who is the Home Minister of India?
- c) Which is the deepest lake in the world?
- d) Which city is known as "The city of bells"?
- e) Which city is known as "The step of Wells"?
- f) Which city is known as "The Rajasthan Ka Nagpur"?
- g) When was Rajasthan formed?
- h) Who is the present foreign minister of India?
- i) How many union territories are there in India?
- j) How many states are there in India?

Q: 2 Tick the correct option:

2 × 10

- a) Which animal is born with horns?
i. Deer ii. Giraffe iii. Rhinoceros
- b) Which insect flashes a bright light while flying?
i. Jewel bug ii. Firefly iii. Moon moth
- c) Which is the largest flower in the following?
i. Lilly ii. Dahlia iii. Rafflesia
- d) Which of these can produce the fastest winds?
i. Tsunami ii. Avalanche iii. Tornado
- e) Which of these animals sent to space?
i. Dog ii. Gorilla iii. Elephant
- f) Which city has Jantar-Mantar ?
i. Delhi ii. Agra iii. Mumbai
- g) Which fort is closest to the Charminar?
i. Agra ii. Golconda iii. Gwalior
- h) In which state would you find the Taj Mahal?
i. Rajasthan ii. Uttar Pradesh iii. Madhya Pradesh
- i) Which place in India has a volcano?
i. Barren island ii. Silent valley iii. Lakshadweep
- j) Mangalyaan was made to study:-
i. The moon ii. Jupiter iii. Mars

Q: 3 Answer the following questions :-

3 × 5

- a) Who invented the phonograph?
- b) Who invented the telephone?
- c) Name the three deserts?
- d) Who was the first man in space in the world?
- e) Who was the first woman in space in the world?

Q: 3 Long answer questions:-

5×3

a) Match the following:-

- | | |
|-----------------|-----------------|
| 1. Tripura | i. Gandhi Nagar |
| 2. Assam | ii. Patna |
| 3. Bihar | iii. Raipur |
| 4. Chhattisgarh | iv. Dispur |
| 5. Gujarat | v. Agartala |

b) Write the names of the desert animals. (any five)

c) Write the one word of the following :-

- i. The tiger of Mysore _____
- ii. He built the Taj Mahal _____
- iii. The famous Rani of Jhansi _____
- iv. The most famous Maratha ruler _____
- v. The only woman sultan of Delhi _____

Q: 4 Write about your state in ten lines.

10×1

Summative Assessment – 1 (2019-20)

Max.M.-50

Class – IV

Subject – ENGLISH

Time-2 Hrs.

Reading

1. Read the passage carefully and answer the questions given below. 10

The milkman's cow was in a bad mood. It sat in the middle of the road and refused to move. The milkman begged the cow to get up. "The children are waiting for their milk to help them grow strong. Please get up," he pleaded. He pulled and tugged and prayed. But the cow wasn't going anywhere that day.

Along came a policeman, his buttons and buckles gleaming bright. "Humph," he said, twirling his long moustache, "I'll show you how to do it right." The policeman and the milkman pulled and tugged and prayed. But the cow wasn't going anywhere that day.

Along came a grocer with bags of potatoes and peas. He said, "I'll move this cow with the greatest of ease." The grocer, the policeman and the milkman pulled and tugged and prayed. But the cow wasn't going anywhere that day.

Along came a wrestler, his muscles gleaming in the sun. He said, "I have the strength of ten horses, so this should be fun." The wrestler, the grocer, the policeman and the milkman pulled and tugged and prayed

1. Who was in a bad mood?
2. Where did it sit down?
3. Why did the cow refuse to get up?
4. What did the milkman do to make the cow to move?
5. Did the milkman alone able to move the cow?
6. Who had a long moustache?
7. Who came with bags of potatoes and peas?
8. How much strength did the wrestler had?
9. Name those who tried to make the cow move?
10. Can you make the cow move? How?

2. (Handwriting) 5

Write the passage given below in neat and good handwriting. Once upon a time, an old carpenter bought a very queer piece of wood. As he used his plane on it, he heard a little laughing voice say, "Stop! You're tickling me."

(Prose and Poetry)

Answer the following questions.

2x3=6

1. Who are already awake?
2. Why does the poet feel that nose is a funny things?

3. What is your favorite fruit ? Describe it in five lines.

(Grammar)

1. Give the Opposite of the words that given below 2
 - i. Polite
 - ii. Perfect
 - iii. Important
 - iv. Patient
2. Use the help box to fill in the blanks. 4 Was /Were
 - i. Rama good football player.
 - ii. My toys.....broken.
 - iii. Her frock..... too long.
 - iv. The children..... Happy.
3. Put the letters in the right order. One has been done for you. 4
 - i. llems- smile
 - ii. norming
 - iii. edorns
 - iv. oclkc
 - v. wondwin
4. Fill in the blanks according to the example given below. 4
 - i. Tiny tinier tiniest
 - ii. Big
 - iii. Small
 - iv. Late
 - v. Sleepy
5. Fill the missing letters. 4
 - i. Tr_ _s
 - ii. F_ et
 - iii. S_ e_ p
 - iv. M_ a_ dow
 - v. S_ u_ en_
6. Change gender in feminine. 2
 - i. Vixen
 - ii. Husband
 - iii. Sir
 - iv. Lion
 - v. Prince
7. Write down synonyms. 4
 - i. Arrive
 - ii. Escape
 - iii. Get
 - iv. Destroy
8. Write down a compo on My Dog /Cat (Ten lines) 5

(Best of luck)

SUMMATIVE ASSESSMENT - 1 (2019-20)

कक्षा - 4

विषय - हिन्दी

अधिकतम अंक - 50

1. राज दरबार के लोग मन ही मन राजा को बुरा कहते थे, लेकिन वे राजा का विरोध क्यों नहीं कर पाते थे? 2
2. बरसात के दिनों में अक्सर दरवाजें और खिड़कियों से पानी की बौछार आ जाती है। कभी-कभी छत से पानी टपकता है, सीलन भी आ जाती है। ऐसी स्थितियों से निपटने के लिए तुम्हारे घर में क्या-क्या किया जाता है? 2
3. जमाल साहब ने घूमने जाने से क्यों मना कर दिया? 2
4. क्या तुम्हें भी घर में बताया जाता है कि तुम्हें बड़े होकर क्या बनना है? 2
5. दीपक गेंद को अपनी क्यों बता रहा था? 2
6. वचन किसे कहते हैं? इसके कितने भेद हैं? नाम लिखो। 1
7. संज्ञा किसे कहते हैं? इसके कितने भेद होते हैं? नाम लिखो। 1
8. विलोम शब्द लिखो- 2
 - a. मान
 - b. आय
 - c. अनुकूल
 - d. कोमल
9. अनेक शब्दों के लिए एक शब्द लिखिए- 5
 - a. सुनने वाला -
 - b. जिसकी कभी मृत्यु न हो -
 - c. जो आसानी से प्राप्त हो जाए -
 - d. जो पढ़ा-लिखा न हो -
 - e. जो दिखाई न दे -
10. लिंग बदलें - 3
 - a. छात्र
 - b. बालक
 - c. गायक
 - d. चाचा
 - e. घोबी
 - f. नर
11. मुहावरे लिखिए - 5
 - a. मिट्टी में मिल जाना
 - b. अंगूठा दिखाना
 - c. आसमान सिर पर उठाना
 - d. नौ दो ग्यारह होना
 - e. मुँह में पानी आना
12. वचन बदलें - 2
 - a. केला
 - b. महिला
 - c. माला
 - d. पुस्तक
13. निम्न शब्दों के 1-1 पर्यायवाची शब्द लिखिए - 3
 - a. केला
 - b. महिला
 - c. माला
14. कहानी लिखिए - चींटी और कबूतर 8
15. विद्यालय छोड़ने का प्रमाण-पत्र लेने हेतु आपके विद्यालय के प्रधानाचार्य को एक प्रार्थना-पत्र लिखिए। 7
16. गाय पर एक निबंध लिखो। 3

SUMMATIVE ASSESSMENT – 1 (2019-20)

CLASS : IV

TIME- 2:00 HRS.

MM - 50

SUB: MATHS

Basic Concept

(1) Fill in the blanks (Any four) (4x1=4)

- a. Arrange 5, 3, 7, 2 to form the smallest 4 digit number _____ and the greatest 4 digit number _____
- b. $1000 + 300 + 4 =$ _____
- c. Expand $4287 = 4000 +$ _____ $+$ _____ $+ 7$
- d. 1 kilometre = _____ metres and 1 metre = _____ cm
- e. A brick has _____ faces and _____ edges.

(2) Do as directed (2x2=4)

(i) Write the place value of 4 in each number.

4	6	0	9	→	_____
6	3	4	7	→	_____

(ii) Encircle the pairs of numbers which when added makes more than 500? 1

- a. 152 and 241 b. 321 and 192 c. 420 and 184 d. 209 and 290

(iii) Express as 24- hours clock time 2

- a. 3.15 AM _____ b. 7.40 PM _____

(iv) Fill in the blanks using sign. >/< or = 2

- (a) XIV ---- XXX (b) XXX-----XXX
(c) C----- D (d) CIX----- XIL

II UNDERSTANDING THE BASIC CONCEPTS



Solve the following:

(i) Write these dates in numbers. 2

- a. 1st June 2006 ---- b. 14th November 2008 ---

(ii) Write the TIME shown on the clock faces :

2



(iii) Arrange and add 2319, 1440 and 3712

1

(iv) Find the difference : 9713 and 3455

1

(v) $7 \times 9 = 63$: then, $70 \times 90 =$ _____

2

$7000 \times 9 =$ _____

(vi) Find the sum.

6

a) $18777 + 39316 + 10018 =$

b) $496501 + 297169 + 62 =$

c) $485626 - 496501 =$

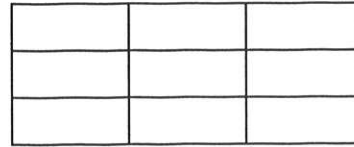
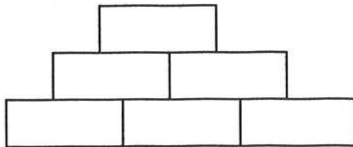
d) $16969 - 10419 =$

ABILITY IN COMPUTATION

(1) Do as Directed

(i) Tick the wall that will be **stronger**

2



(ii) Fill in the suitable measures

1

700 ml

 +

--

 =

1 Litre

(iii) Name two things that can be **used to draw triangle.**

1

(iv) Name any **Land Mark** which is very near to your school

1

(v) Fill in: A circle can have two centres. _____ (True / False)

1

(2) Find the Answers

(i) Fill in the missing numbers:

4

$$\begin{array}{r} 4 \quad 3 \quad \square \quad 3 \\ + \square \quad 5 \quad 2 \quad \square \\ \hline 6 \quad \square \quad 1 \quad 3 \end{array}$$

$$\begin{array}{r} 8 \quad 9 \quad \square \quad 8 \\ 7 \quad \square \quad 8 \quad \square \\ \hline \square \quad 5 \quad 7 \quad 4 \end{array}$$

(ii) Find the difference of: 40 L 380 ML - 27 L 255 ML

2

(iii) Find the product of:

$$\begin{array}{r} 134 \\ \times 56 \\ \hline \end{array}$$

$$\begin{array}{r} 4586 \\ \times 27 \\ \hline \end{array}$$

3

(iv) Divide and find the Quotient and Remainder

3

i. 74 By 3 ii. 486 By 15

(v) Fill the blanks and then do sum

Four 100 rupee notes = Rs.

Three 50 rupee notes = Rs

Seven 20 rupee notes = Rs

Nine 10 rupee notes = Rs _____

Total = _____

IV. Problem solving ability

(1) Solve the problems with proper statements

(i) If 1 kg iron costs Rs. 12, find the cost of 8 kg iron.

2

(ii) If 1 kg brass costs Rs. 140, What is the cost of Half Kg. brass?

2

(iii) A milk booth sold 1284 milk packets on Monday and 1419 milk packets on Tuesday. Find the total number of packets sold on both the days.

2

(iv) A toy train has 164 seats. Find the number of seats in 7 such trains.

2

(v) Find the number of days from 2

a. 12th Feb to 16th Feb → _____

b. 5th Dec to 15th Dec → _____

(2) What number should be added to 28088 to get 461000 ?

2

BEST OF LUCK

SUMMATIVE ASSESSMENT -1 (2019-20)

CLASS-4

SUBJECT- EVS

TIME – 2:00 HRS.

MM. 50

A. Answer the following questions.

- i. What is bridge ?
- ii. Was there a difference in the way you walked each time? Discuss.
- iii. Write down the name of the animals whose ears we can see. And we can't see. (Any –five)
- iv. Does dog get angry?
- v. Where does tiger live?
- vi. Which animals are prefer to live in herds?
- vii. Why are the animals get angry / sad with human body?
- viii. Have you seen anyone to talk about the care of trees?
- ix. Why are the numbers of animals and birds extinct?
- x. What is RTE Act 2009?
- xi. Where do the ants live?
- xii. What does the ticket checkers do in the buses or trains?
- xiii. How many times can you say it while you are playing Kabbadi?

B. Choose the correct answer from the bracket and fill in the blanks:

[snakes, herbs, pulley, beehive]

- a) Very small plants are called -----
- b) -----always swallow their food
- c) The house of the bees is called -----
- d) A -----help the trolley to move across the rope.

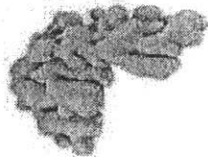
C. Match the following.

- | | | |
|-----------------|---|-----------|
| a. army | - | dhirham |
| b. Abu Dhabi | - | defence |
| c. Pilloo aunty | - | Gurudwara |
| d. Langar | - | Honest |


D. Look the picture answer the questions.



1. a) Where is Chuskit sitting.?
- b) Why is she not able to go to school?



2. a) Name this spice:-
- b) Why do we add this spice into the dishes ?



3. a) The artist have drawn wrong years on the heads of the animals. Give the correct ears to the animals in the space given below:

Animal	Ear
Elephant	-----
Giraffe	-----
Mouse	-----

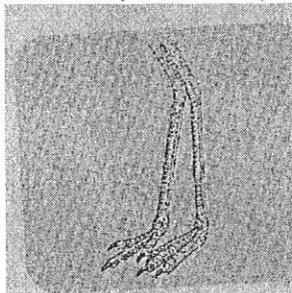
1. Look the picture and identify the question given below.



- a) Identify this picture: -----
b) Which festival is related to this: -----



2. a) Identify this helper in the Railway Station:-
b) Name any other helper in the railway station:-



3.

- a) What is the advantage of this type of long leg?
b) Name a bird having long legs:-
4 Write the names of two insects which always come near the flowers: -

- E a) Name two flowers blooming at night:-
b) Draw any one flower. Name and colour it.

F. Write down five lines about.